

NAB Competition 2021- II - 1st

National Analytical Brains Competition 2021-II- 1st

* Required

1. Name *

2. Registration ID *

3. Contact Number (registered one) *

Mathematical Ability

All question are mandatory. Please note there is no negative marking:

4. 1. The missing numbers are:



Mark only one oval.

- ☐ 76, 77
- ☐ 76, 78
- ☐ 78, 80
- ☐ None of these

5. 2. Which apple has the smallest number?



Mark only one oval.

- ☐ A
- ☐ B
- ☐ C
- ☐ D

6. 3. The addition of a number with 0 is the number itself:

Mark only one oval.

- ☐ True
- ☐ False
- ☐ Can't Say

7. 4. Which number makes the given statement true?

$$5 + 23 = 20 + \underline{\quad}$$

Mark only one oval.


- ☐ 5
- ☐ 3
- ☐ 8
- ☐ 10

8. 5. If we interchange the digits in the tens and ones place of 76, then what will be the new number?

Mark only one oval.

- ☐ Sixty seven
☐ Seventy six
☐ Seven six
☐ None of these

9. 6. Find the number between 38 and 40.



Mark only one oval.

- ☐ 38
☐ 39
☐ 40
☐ None of these

10. 7. What is the 5th day of the week?

Mark only one oval.

- ☐ Wednesday
☐ Thursday
☐ Saturday
☐ Friday

11. 8. Choose the correct option to fill the blank:

655 _____ 695

Mark only one oval.

☐ =

☐ >

☐ <

12. 9. What is the time in the clock?



Mark only one oval.

☐ 7

☐ 8

☐ 12

☐ 6

13. 10. What is the ordinal position of "ELEPHANT" in the given collection?



Mark only one oval.

☐ 4TH

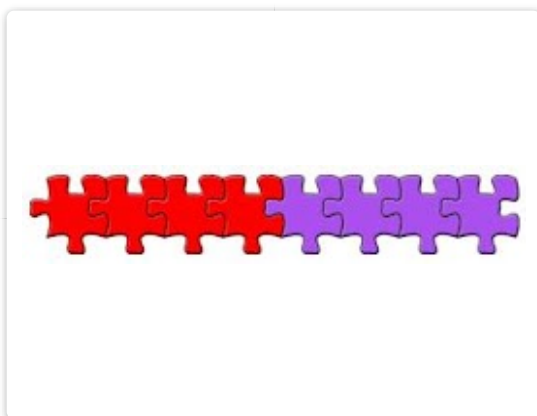
☐ 5TH

☐ 3RD

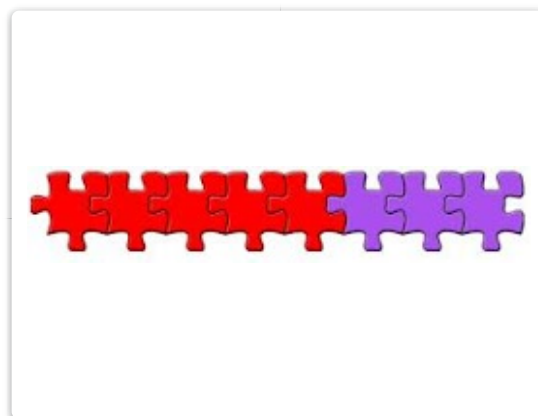
☐ 2ND

14. 11. Which picture shows $5+3=8$


Mark only one oval.



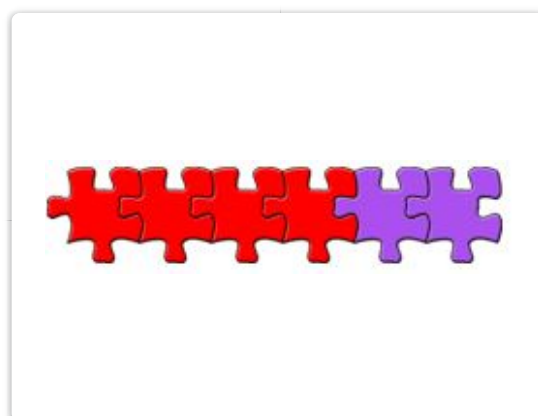
☐ Option 1



☐ Option 2



☐ Option 3



☐ Option 4

15. 12. If today is Tuesday, then what day will be tomorrow?

Mark only one oval.


☐ Friday

☐ Tuesday

☐ Monday

☐ None of these

16. 13. Which option has maximum number of objects?



A



B



C



D

Mark only one oval.

☐ A

☐ B

☐ C

☐ D

17. 14. How do you make 13?

Mark only one oval.

☐ 15 - 4

☐ 16 - 3

☐ 17 - 2

☐ 14 - 2

18. 15. 12 more than 15 is _____

Mark only one oval.

☐ 27

☐ 17

☐ 15

☐ 3

19. 16. Which sign is missing?

$$18 _ 4 = 14$$

Mark only one oval.

☐ -

☐ +

☐ <

☐ >

20. 17. Which of the following is correctly matched?

Mark only one oval.

☐ Six hundred and twenty five – 652

☐ Five Hundred – 509

☐ Two hundred and fifty five – 245

☐ Seven hundred and two – 702

21. 18. Face value of 5 in 501 is :

Mark only one oval.

☐ 5

☐ 500

☐ 501

☐ 50

22. 19. Which picture shows $5 - 2 = 3$?

Mark only one oval.



☐ A



☐ B



☐ C



☐ D

23. 20. Esha baked 8 cupcakes. Her friends ate 6 of the cupcakes. How many cupcakes does Esha have now?

Mark only one oval.

☐ 8

☐ 6

☐ 2

☐ 14

Logical Reasoning
Ability

All question are mandatory. Please note there is no negative marking:

24. 21. Which one has less weight?



Mark only one oval.

- ☐ Rice
- ☐ Salt
- ☐ Both are Equal
- ☐ None of These

25. 22. Which of the following figures will replace (?) to complete the given figure series?



Mark only one oval.

- ☐ A
- ☐ B
- ☐ C
- ☐ D

26. 23. Which Community helper is this?



Mark only one oval.

- ☐ Barber
- ☐ Doctor
- ☐ Sweeper
- ☐ Cobbler

27. 24. Complete the series:



Mark only one oval.



☐ A



☐ B



☐ C



☐ D

28. 25. Complete the series.

10 8 6 ? 2

Mark only one oval.

☐ 5

☐ 4

☐ 3

☐ 1

29. 26. Which object is under the table?



Mark only one oval.

- ☐ Book
- ☐ Ball
- ☐ Pencil
- ☐ Ball & Pencil

30. 27. Who is on the right most end?



Mark only one oval.

- ☐ Cat
- ☐ Dog
- ☐ Lion
- ☐ Donkey

31. 28. Find the odd one out:



A



B



C



D

Mark only one oval.

☐ A

☐ B

☐ C

☐ D

32. 29. Complete the series.

A, a, B, b, C, c, D, d, E, __, F, f, G, g

Mark only one oval.

☐ E

☐ e

☐ f

☐ None of These



33. 30. Which pencil is not yellow and not blue, not the shortest and not the longest?



Mark only one oval.

- ☐ Blue
- ☐ Green
- ☐ Yellow
- ☐ Purple

34. 31. Complete the missing shape



Mark only one oval.

- ☐ A
- ☐ B
- ☐ C
- ☐ D

35. 32. How many sides has this geometric shape?



Mark only one oval.

☐ 6

☐ 5

☐ 7

☐ 8

36. 33. Who is the strongest:



A



B



C



D

Mark only one oval.


☐ A

☐ B

☐ C

☐ D

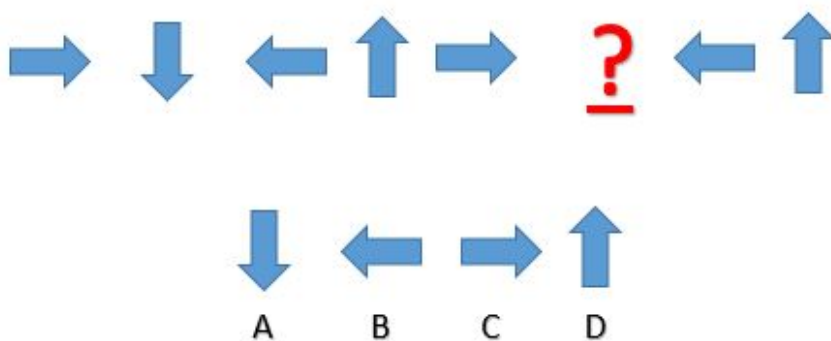
37. 34. Which picture should come next in the series?



Mark only one oval.

- ☐ A
- ☐ B
- ☐ C
- ☐ D

38. 35. Complete the missing series.



Mark only one oval.

- ☐ A
- ☐ B
- ☐ C
- ☐ D

39. 36. Which one is the lightest ball?



A



B



C



D

Mark only one oval.

☐ A

☐ B


☐ C

☐ D


40. 37. Find the odd one out:




A



B



C



D

Mark only one oval.

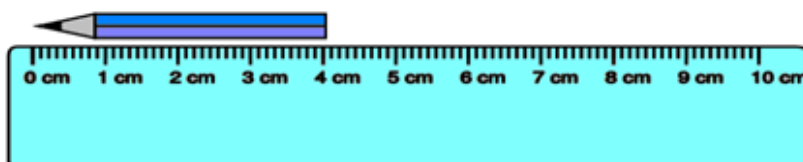
☐ A

☐ B

☐ C

☐ D

41. 38. In the figure given below, length of the pencil is:



Mark only one oval.

☐ 3 cm

☐ 4 cm


☐ 5 cm

☐ 2 cm

42. 39. What will come next in the below pattern?




Mark only one oval.




☐ Option 1



☐ Option 2




☐ Option 3



☐ Option 4

43. 40. Which one holds less?



Mark only one oval.

- ☐ A
- ☐ B
- ☐ Both hold Equal

Real Life Problems

All question are mandatory. Please note there is no negative marking:

44. Q 41: If any building catches up fire , whom will you contact:



A



B



C

Mark only one oval.

- ☐ A
- ☐ B
- ☐ C
- ☐ None of the above

45. Q 42: Which of the following activities we should NOT do inside our house?



A



B



C



D

Mark only one oval.

☐

A

☐

B

☐

C

☐

D

46. Q 43: If you meet a stranger, you should :

Mark only one oval.

☐

Share food with him

☐

Play with him

☐

Talk to him

☐

Refuse to go with him.

47. Q 44: When you are inside the School bus, it is better to :

Mark only one oval.

☐

Sit facing forward

☐

Dance on the seat

☐

Run inside the bus

☐

Fight with your friends.

48. Q 45: Green Light means:



Mark only one oval.

- ☐ Stop
- ☐ Go
- ☐ Wait
- ☐ None of These

49. Q 46: What will you do first, after coming back home from playing?



A



B



C



D

Mark only one oval.

- ☐ A
- ☐ B
- ☐ C
- ☐ D

50. Q 47: Guess who can be this person:



Mark only one oval.

- ☐ Carpenter
- ☐ Painter
- ☐ Plumber
- ☐ Electrician

51. Q 48: To save yourself from CORONA virus, what you should NOT do?




A



B



C



D

Mark only one oval.

- ☐ A
- ☐ B
- ☐ C
- ☐ D

52. Q 49 Which one is not safe ?

Mark only one oval.

- ☐ Play with gas lighter
- ☐ Touching electrical devices and switches with wet hands
- ☐ Playing with kitchen knife
- ☐ All of the Above

53. Q 50: To buy pen and notebook, where should you go?

Mark only one oval.

- ☐ Medical Store
- ☐ Stationary Shop
- ☐ Grocery Shop
- ☐ Cake Shop

This content is neither created nor endorsed by Google.

Google Forms